

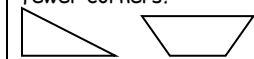







# March 2017

# Kindergarten



Sunday	Monday	Tuesday	Wednesday	Thursday	Friday	Saturday
			Which number comes between 4 and 6?	How many sides does a square have?	Count the number of forks in your kitchen drawer. Write that number.	
	Name the months of the year.	Which one is the largest? 	Which day comes before Monday?	Name the numbers that come between 16 and 20 when you count.	Count the number of forks in your kitchen drawer. Write that number.	
	What number is 10 more than 7?	How many dots do you see? 	Write your last name. How many letters are in your last name?	$2+2=$ $3+3=$ $4+4=$	Skip count by 10's as high as you can.	
	Which shape has fewer corners? 	Write the numbers 1-20.	Draw a picture that has one rectangle, two squares, three triangles and four circles.	Count to 50.	Which is heavier? A baseball or a bowling ball?	
	Draw a picture that has one rectangle, two squares, three triangles and four circles.	Which figure can you trace to make this shape?  	Bo has 5 baseballs. If he gives 3 baseballs to Wren, how many will he have left?	How many sides does a triangle have?	What shape is this?  Circle Triangle Square	